




# MATH.


CLASS-LKG


## SAMPLE QUESTIONS


---

1. Tick on the sets of Many.


A. 


B. 


C. 


D. 

2. Which is heavier from all in below pictures ?

A. 

B. 

C. 

D. 

3. How many days in a week ?


A. 5

B. 6

C. 7

D. 8

4. What Comes in next order ?



A. Leaf

B. Flower

C. Fruit

D. Tree

5. 1 2 3 \_\_\_\_ 5 6

What is the missing number in the number line?

A. 5

B. 4

C. 6

D. 7

6. How many fish in the picture ?



- A. 4       B. 5       C. 6       D. 7





7. What comes just after the number 8 ?

- A. 7       B. 8       C. 9       D. 10

8. What number is to the right of the number 7 in number line ?

- A. 5       B. 6       C. 7       D. 8

9. Which box have less number of things from all ?

A.        B.        C.        D. 

10. Put the correct sign between the box ?

 ? 

A. =       B. <       C. +       D. <

11.



What will be the symbol between the two box ?

- A. <       B. \$       C. =       D. +


12. You have 4 Chocolate , your mother takes 4 chocolate from you. Then how many chocolate still you have ?

- A. 0       B. 1       C. 2       D. 3


13. How many fingers are there in three hand ?



- A. 5                      B. 10                      C. 8                      D. 15



Box No-1



Box No-2

14. How many more apples in the Box no-1 than Box No-2

- A. 5                      B. 6                      C. 4                      D. 16

15. Out of some fishes you catch 8 fishes. After you catch there are 8 fishes left in the pond. How many fishes were there in the pond ?

- A. 0                      B. 10                      C. 16                      D. 12

**Answer :**

**1. B    2. A    3. C    4. B    5. B    6. C    7. C    8. D    9. C    10. D**

**11. A    12. A    13. D    14. B    15. C**