









MATH.

CLASS-UKG

SAMPLE QUESTIONS

1.  +  = ?
- A. 4 B. 8 C. 6 D. 9
2. Which number comes just before the number "19"?
- A. 17 B. 18 C. 19 D. 20
3. Which number is between the numbers 22 and 24 ?
- A. 20 B. 21 C. 23 D. 25
4. Which number comes after the number "38"
- A. 36 B. 37 C. 38 D. 39
5.  -  = ?
- A. 9 B. 1 C. 0 D. 10
6.  +  = ?
- A. 10 B. 12 C. 14 D. 15
7. +  = 
- A. 3 B. 2 C. 4 D. 5
8. Select the biggest number from below numbers ?
- 4,2,5,9,3,7,7,8,5,6,4,2,7,6
- A. 6 B. 7 C. 8 D. 9

9. What will be the ascending order of the below numbers ?

“5,8,12,4,6,3”

- A. 5,3,4,8,12,6 B. 3,4,6,5,8,12 C. 3,4,5,6,8,12 D. 3,4,5,8,6,12

10. What will be the Descending order of below numbers ?

“5,9,4,11,3,6”

- A. 3,4,5,6,9,11 B. 11,9,6,5,4,3 C. 11,9,5,6,4,3 D. 9,11,6,5,4,3

11. What is the ordinal of “8”?

- A. Eight B. Eighty C. Eighth D. 80

12. What is the 4th day of a week ?

- A. Tuesday B. Thursday C. Friday D. Sunday

13. The day after “ Tuesday “ is _____ ?

- A. Monday B. Thursday C. Wednesday D. Friday



14. What is the shape of the Dice ?

- A. Round B. Cone C. Cube D. Sphere

15. 1 ten and a Five is called _____ ?

- A. Ten B. Twenty five C. Fifteen D. Five

Answers

1.D 2.B 3.C 4.D 5.C 6.A 7.C 8.D 9.C 10.B 11.A 12.B 13.C 14.C 15.C