





MATH.


CLASS-LKG


SAMPLE QUESTIONS

1. Tick on the sets of Many.


A.  ☐


B.  ☐


C.  ☐


D.  ☐

2. Which is heavier from all in below pictures ?

A.  ☐

B.  ☐

C.  ☐

D.  ☐

3. How many days in a week ?


A. 5 ☐

B. 6 ☐

C. 7 ☐

D. 8 ☐

4. What Comes in next order ?



A. Leaf ☐

B. Flower ☐

C. Fruit ☐

D. Tree ☐

5. 1 2 3 ____ 5 6

What is the missing number in the number line?


A. 5 ☐

B. 4 ☐

C. 6 ☐

D. 7 ☐

6. How many fish in the picture ?



A. 4

B. 5

C. 6

D. 7

7. What comes just after the number 8 ?

A. 7

B. 8

C. 9

D. 10

8. What number is to the right of the number 7 in number line ?

A. 5

B. 6

C. 7

D. 8

9. Which box have less number of things from all ?

A.




B.




C.



D.



10. Put the correct sign between the box ?



?



A. =

B. <

C. +

D. >

11.



What will be the symbol between the two box ?

A. <

B. \$

C. =

D. +

12. You have 4 Chocolate , your mother takes 4 chocolate from you. Then how many chocolate still you have ?

A. 0

B. 1


C. 2

D. 3


13. How many fingers are there in three hand ?



- A. 5 B. 10 C. 8 D. 15



Box No-1



Box No-2

14. How many more apples in the Box no-1 than Box No-2

- A. 5 B. 6 C. 4 D. 16

15. Out of some fishes you catch 8 fishes. After you catch there are 8 fishes left in the pond.
How many fishes were there in the pond ?

- A. 0 B. 10 C. 16 D. 12

Answer :

1. B 2. A 3. C 4. B 5. B 6.C 7. C 8. D 9. C 10.D

11. A 12. A 13. D 14. B 15.C